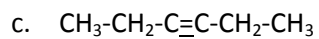
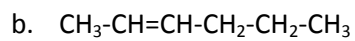
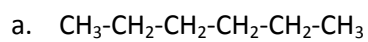


## Organic Chemistry

Name the following:



Draw the structure for the following:

a. 3-heptene

b. 2-butyne

c. 2-methyl-1-propene

d. 4,4-dimethyl-2-pentene